


3rd Math 1.3b

Name: _____

Class: _____

Date: _____

1. Which picture shows 8 volleyballs being divided among 4 bins?



2. If you take 24 oranges and put 6 in each group, how many groups do you have?

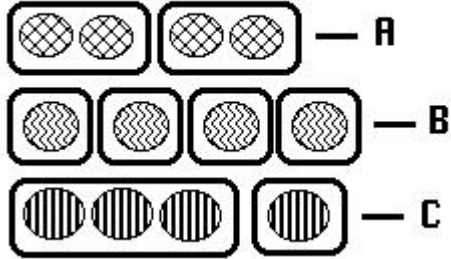
- A. 3 groups
- B. 12 groups
- C. 6 groups
- D. 4 groups

3. If you take 15 soccer balls and put 5 in each group, how many groups do you have?

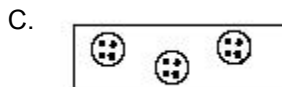
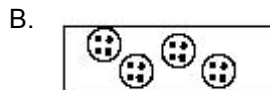
- A. 3 groups
- B. 5 groups
- C. 10 groups
- D. 1 group

4. If you take 27 presents and put 3 in each group, how many groups do you have?
- A. 3 groups
 - B. 9 groups
 - C. 6 groups
 - D. 27 groups

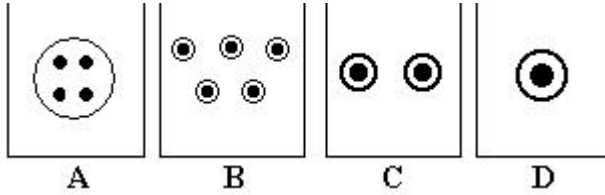
5. Which picture shows 2×2 ?



- A. A
 - B. B
 - C. C
 - D. None of the above
6. Which group shows 4 groups of 4?



7. Which picture shows 1×1 ?



- A. A
B. B
C. C
D. D
8. 5×4 is the same as _____ .
A. $4 + 4 + 4 + 4$
B. $5 + 5 + 5 + 5 + 5$
C. $4 + 4 + 4 + 4 + 4$
D. $4 + 4 + 4 + 4 + 5 + 5 + 5 + 5 + 5$
9. 7×3 is the same as _____ .
A. $3 + 3 + 3$
B. $3 + 3 + 3 + 3 + 3 + 3 + 3$
C. $7 + 7 + 7 + 7 + 7 + 7 + 7$
D. $3 + 7 + 3 + 7 + 3 + 7$
10. 2×6 is the same as _____ .
A. $6 + 6 + 6 + 6 + 6 + 6$
B. $2 + 2$
C. $6 + 2 + 6 + 2$
D. $6 + 6$